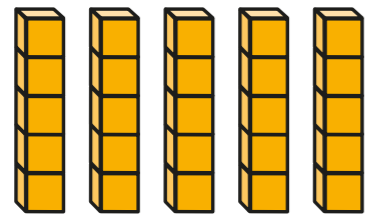
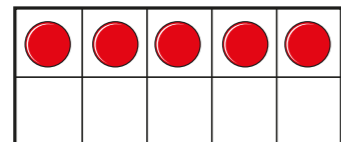


The 5 times-table

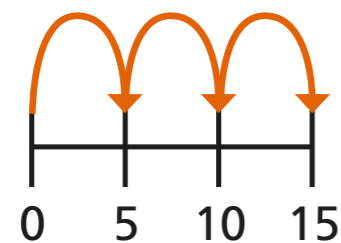
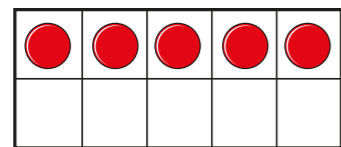
1 a) Match the picture to the times-table fact.



3×5



2×5



1×5

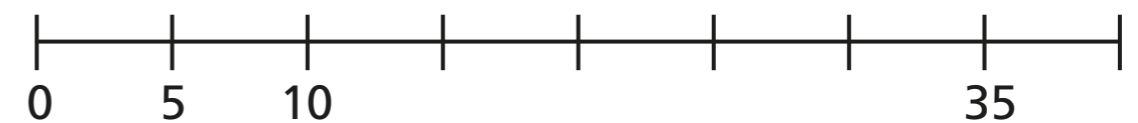


5×5

b) Draw a picture to show 4×5



2 a) Complete the number line.



b) Which times-table does the number line show?

Tick your answer.

1 times-table

2 times-table

5 times-table

How do you know?



3 Complete the number sentences.

a) $5 \times 5 =$

f) $= 11 \times 5$

b) $= 9 \times 5$

g) $5 \times$ $= 5$

c) $5 \times 6 =$

h) $5 \times 0 =$

d) $5 \times$ $= 40$

i) $10 = 5 \times$

e) $35 =$ $\times 5$

j) $\times 5 = 60$

4 How much money does Ron have?



Complete the multiplication.

\times $=$

Ron has p.

5 Write $<$, $>$ or $=$ to compare the calculations.

7×5 5×8

6×5 $4 \times 5 + 2 \times 5$

2×5 $3 \times 5 - 1 \times 5$

12×2 2×12

6 A sandwich costs £2 and a box of crayons costs £5



Jack buys 5 sandwiches and 3 boxes of crayons. How much does he spend in total?

Jack spends £